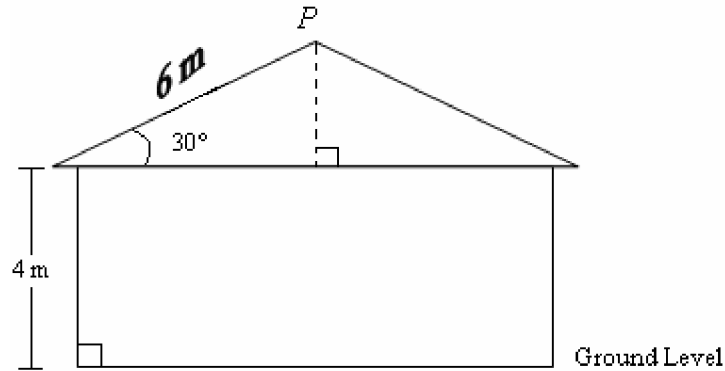


MULTIPLE CHOICE

1. The diagram below shows the side view of a house. The base of its roof is 4 meters above ground level. Point P is the highest point on the roof.



What is the distance from **P** to ground level?

- | | |
|--------|---------|
| a. 6 m | c. 10 m |
| b. 7 m | d. 13 m |

ANS: B

We need to find the height of the roof and then add this to the height of the floor (4m)

The side opposite the 30° angle is half the length of the hypotenuse - given here as 6m.

So the height of the roof is $\frac{6\text{ m}}{2} = 3\text{ m}$.

The total height is: $4\text{ m} + 3\text{ m} = 7\text{ m}$.

PTS: 1 DIF: Grade 10 REF: GS 01

KEY: right triangles, basic angles, trigonometry, geometric sense

MSC: <http://www.k12.wa.us/assessment/WASL/Mathematics/MathematicsModules.aspx> -- Week 1
Assessment Q #1

2. The stem-and-leaf plot shows the scores on Mr. Smith's history exam.

Exam Scores	
5	8
6	2 7
7	0 3 3 6
8	4 5 5
9	2 2 2 4 7
10	0

Key
6 2 represents 62

Which of the following measures of the data is largest value?

- a. mean
- b. median
- c. mode
- d. range

ANS: C

It is easiest to find the range and mode on a stem-and-leaf plot, so we will find these first.

The **range** is the highest (last) minus the lowest (first) so: $\text{range} = 100 - 58 = 42$.

To find the **mode** we look for repeating data in a row - in the fourth row "2" repeats itself 3 times, so: $\text{mode} = 92$.

Because this number is so much larger than the "average" data, one can conclude here that the mode will be larger than both the mean and the median.

So the mode is the largest value in **this** stem-and-leaf plot.

PTS: 1

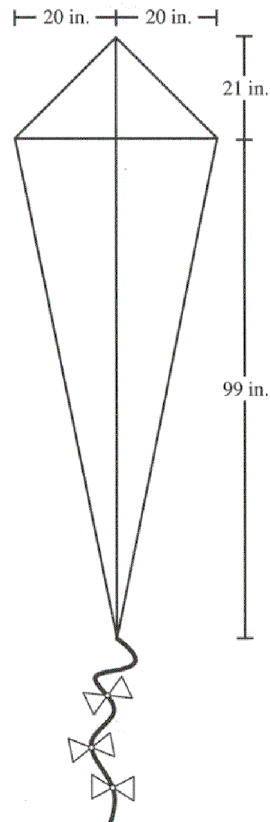
DIF: Grade 10

REF: PS 02

KEY: stem-and-leaf, plot, mean, media, mode, range, statistics

MSC: <http://www.k12.wa.us/assessment/WASL/Mathematics/MathematicsModules.aspx> -- Week 1 Assessment Q #2

3. A kite has perpendicular diagonals with the measures shown in the drawing below.



What is the perimeter, in inches, of the kite?

- | | |
|--------|--------|
| a. 130 | c. 260 |
| b. 165 | d. 310 |

ANS: C

To find the perimeter, we will need to find the length of the sides of the kite using Pythagoras' theorem twice:

$$a = \sqrt{20^2 + 21^2} = \sqrt{881} = 29$$

$$b = \sqrt{20^2 + 99^2} = \sqrt{10201} = 101$$

$$P = 2a + 2b = 2 \cdot 29 + 2 \cdot 101 = 58 + 202 = 260$$

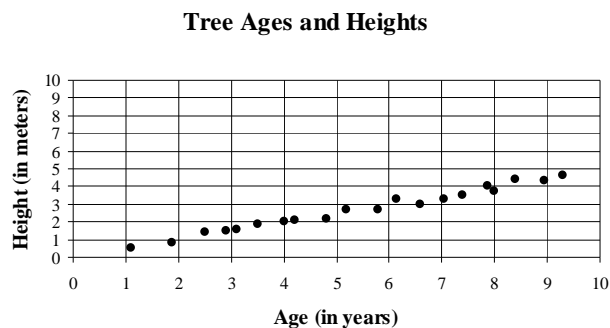
$$P = 260 \text{ in.}$$

PTS: 1 DIF: Grade 10 REF: ME 03

KEY: pythagoras, pythagoras' theorem, measurement sense, kite, diagonals

MSC: <http://www.k12.wa.us/assessment/WASL/Mathematics/MathematicsModules.aspx> -- Week 1 Assessment Q #3

4. The scatter plot shows the ages and heights of 20 trees on a tree farm.



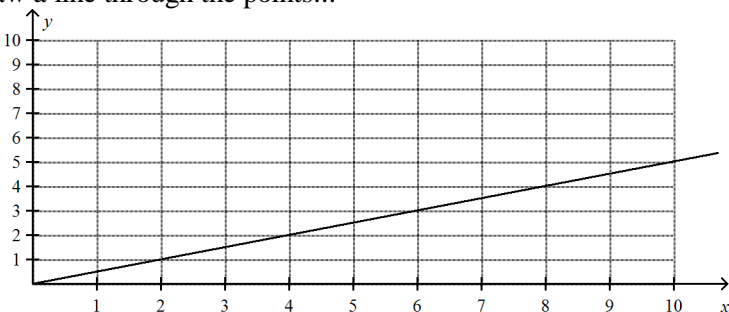
Let x = age in years and y = height in meters.

Which of the following equations best approximates the best fitted line for this scatter plot?

- | | |
|-------------------|-----------------|
| a. $y = 1/2x$ | c. $y = 2x$ |
| b. $y = 1/2x + 5$ | d. $y = 2x + 5$ |

ANS: A

Draw a line through the points...



This line passes through (0,0) so the y-intercept is 0 - so answers (b) and (d) are not correct.

The line passes through (10,5) which satisfies (a), but not (c).

So the answer is (a).

Or you can find the equation of the line passing through (0,0) and (10,5).

P.S. Do NOT visually observe the slope of this line - the scale on the axis is NOT the same.

PTS: 1 DIF: Grade 10 REF: PS 03

KEY: scatter plot, approximation, linear equation, linear function, intercepts, slope, ps, ap

MSC: <http://www.k12.wa.us/assessment/WASL/Mathematics/MathematicsModules.aspx> -- Week 1 Assessment Q #4

6. Kelly wants to buy a tool set that is on sale at a hardware store. The price of each tool set will be decreased by 8% each morning just before the store opens. The sale will last for 7 days, or until all the sets are sold.

After the first reduction on Monday, the price of each set was \$135.

Kelly wants to wait until the first day that the price is \$100 or less.

On which day should she buy her tool set, if one is still available?

- a. Wednesday
- b. Thursday
- c. Friday
- d. Saturday

ANS: C

An 8% discount means that the price on the next day is $100\% - 8\% = 92\%$ of the price on the previous day.

Make a table by multiplying each successive price by 92%.
Stop multiplying when the price is less than \$100.

Mon	Tue	Wed	Thur	Fri	Sat	Sun
\$135	$135 \cdot 92\%$ = \$124.20	\$114.26	\$105.12	\$96.71		

She should buy the set on Friday.

PTS: 1 DIF: Grade 10 REF: MC 01

KEY: percentages, discounts, money, mc, word problem

MSC: <http://www.k12.wa.us/assessment/WASL/Mathematics/MathematicsModules.aspx> -- Week 1
Assessment Q #6

7. On a history test, 20 students received an A and 12 students received a B.

What is the correct ratio of students receiving an A to students receiving a B?

- a. 3 to 2
- b. 4 to 3
- c. 5 to 3
- d. 5 to 4

ANS: C

Ratio is: 20 to 12

We reduce the corresponding fraction: $\frac{20}{12} = \frac{5 \cdot 4}{3 \cdot 4} = \frac{5}{3}$

The reduced ratio is: 5 to 3.

PTS: 1 DIF: Grade 10 REF: NS 02

KEY: ratios, fractions, simplifying, cancellation, ns

MSC: <http://www.k12.wa.us/assessment/WASL/Mathematics/MathematicsModules.aspx> -- Week 1
Assessment Q #7 Edited slightly

8. Vance charges \$19.50 each time he mows his neighbor's lawn.

What is the approximate number of times Vance will have to mow his neighbor's lawn in order to earn \$178.00 to purchase a mountain bike?

- | | |
|-------------|-------------|
| a. 9 times | c. 20 times |
| b. 12 times | d. 25 times |

ANS: A

Vance needs about \$180 and he charges about \$20.

He will need to mow the lawn approximately $\frac{\$180}{\$20} = 9$ times.

PTS: 1 DIF: Grade 10 REF: NS 05

KEY: operations, estimation, money, ns

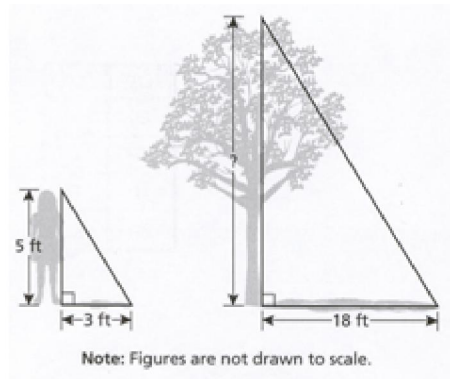
MSC: <http://www.k12.wa.us/assessment/WASL/Mathematics/MathematicsModules.aspx> -- Week 1
Assessment Q #8 Edited slightly to be bimodal.

Elk in the Park

8

12. A girl 5 feet tall casts a 3-foot shadow. At the same time, a tree casts an 18-foot shadow.

What is the height of the tree?



- a. 20 feet
- b. 26 feet
- c. 30 feet
- d. 54 feet

ANS: C

Let x be the height of the tree.

The two triangles are similar so their height to base ratio is the same, that is:

$$\frac{5}{3} = \frac{x}{18}$$

Cross multiplying, we have:

$$5 \cdot 18 = 3x$$

$$3x = 5 \cdot 18$$

$$x = \frac{5 \cdot 18}{3}$$

$$x = \frac{5 \cdot 6}{1}$$

$$x = 30$$


The answer is 30 feet.

PTS: 1 DIF: Grade 10 REF: NS 02

KEY: ratios, triangles, similar triangles, cross-multiplication

MSC: <http://www.k12.wa.us/assessment/WASL/Mathematics/MathematicsModules.aspx> -- Week 1 Assessment Q #12

13. The actual width (w) of a rectangle is 18 centimeters (cm). Use the scale drawing of the rectangle to find the actual length (l).



- a. 6 cm
b. 24 cm
c. 36 cm
d. 54 cm

ANS: D

The ratio of the distance on paper to the actual distance is the same for both the width and the length because this is a scale drawing. So we have:

$$\frac{1.2}{18} = \frac{3.6}{l}$$

Cross-multiply and solve for l .

$$1.2l = 3.6 \cdot 18$$

$$l = \frac{3.6 \cdot 18}{1.2}$$

$$l = \frac{3 \cdot 18}{1}$$

$$l = 54$$

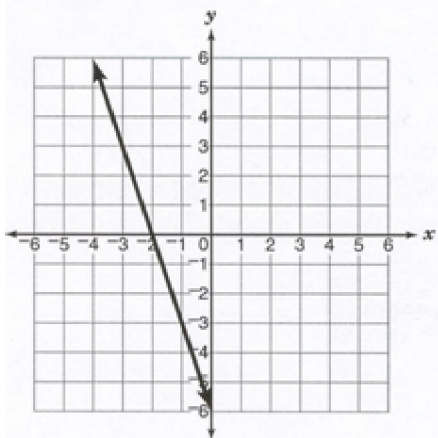
The answer is 54 cm.

PTS: 1 DIF: Grade 10 REF: NS 02

TOP: ratios, fractions, simplifying, cross-multiplication, rectangle, measurement, scale, ns, me

MSC: <http://www.k12.wa.us/assessment/WASL/Mathematics/MathematicsModules.aspx> -- Week 1 Assessment Q #13

14. What is the equation of the line describes a line that fits the data displayed on the graph?



- a. $y = -3x - 2$ c. $y = 3x - 6$
b. $y = -3x - 6$ d. $y = -2x - 6$

ANS: B

1st way: Process of elimination:

The y-intercept is -6, so (a) is not the equation.

The slope is negative (the line slants down from left to right) so (c) is not the answer.

Substitute the point $(-2,0)$ into (b) and (d):

(b) $y = -3 \cdot (-2) + 6$

$$y = +6 - 6$$

$$y = 0$$

So $(-2,0)$ works in (b).

Check that it doesn't work in (d):

(d) $y = -2 \cdot (-2) + 6$

$$y = +4 - 6$$

$$y = -2$$

Good, it doesn't work. (BTW: Only one can work since they both have the same y-intercept.)

So (b) is the answer.

2nd way: Using slope-intercept. We observe the points $(-2,0)$ and $(0,-6)$.

$$y - 0 = \frac{-6 - 0}{0 - (-2)} (x - (-2))$$

$$y = \frac{-6}{2}(x + 2)$$

$$y = -3(x + 2)$$

$$y = -3x - 6$$

So (b) is the answer.

PTS: 1

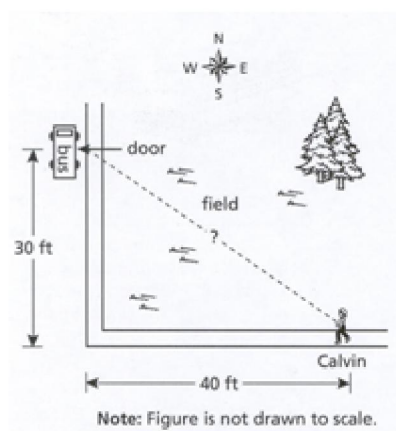
DIF: Grade 10

REF: AS 02

KEY: linear equations, linear functions, slope, intercepts, slope-intercept, coordinates, as

MSC: <http://www.k12.wa.us/assessment/WASL/Mathematics/MathematicsModules.aspx> -- Week 1
Assessment Q #14 Edited slightly to be bimodal.

15. When his bus arrives, Calvin is 40 feet east of the corner. The door of the bus is 30 feet north of the corner.



How far will Calvin run directly across the field to the bus?

- a. 20 feet
- b. 40 feet
- c. 50 feet
- d. 70 feet

ANS: C

“North” and “east” are perpendicular of each other, so the triangle is a right triangle.

1st way: We use Pythagoras’ theorem to find the hypotenuse.

$$d = \sqrt{30^2 + 40^2} = \sqrt{2500} = 50$$

The answer is 50 feet.

or

2nd way: Note that this is a 3-4-5 triangle with scale 10. So the hypotenuse is $5 \cdot 10 = 50$

The answer is 50 feet.

PTS: 1 DIF: Grade 10 REF: ME 03

KEY: right triangles, 3-4-5 triangle, pythagoras, pythagoras' theorem, as, me

MSC: <http://www.k12.wa.us/assessment/WASL/Mathematics/MathematicsModules.aspx> -- Week 1 Assessment Q #15

16. The outer perimeter of a picture frame needs to be at least 98 centimeters. The length of the frame must be 8 centimeters longer than the width.

What is the least possible whole number value of the length of the frame?

- a. 21 centimeters
- b. 28 centimeters
- c. 29 centimeters
- d. 33 centimeters

ANS: C

From: 'The length of the frame must be 8 centimeters longer than the width.', we get:

$$l = 8 + w$$

We know: $P = 2l + 2w$ so substituting, we have:

$$P = 2(w + 8) + 2w = 2w + 16 + 2w = 4w + 16$$

$$P = 2w + 16 + 2w$$

$$P = 4w + 16$$

From 'The perimeter must be **at least** 98 centimeters', we get:

$$4w + 16 \geq 98$$

$$4w + 16 - 16 \geq 98 - 16$$

$$4w \geq 82$$

$$\frac{4w}{4} \geq \frac{82}{4}$$

$$w \geq 20. something$$

So $w = 21$.

Substituting into our first equation: $l = 8 + 21 = 29$


So $l = 29$ cm.

PTS: 1 DIF: Grade 10 REF: SR 04

KEY: measurement, geometry, perimeter, inequalities, substituting, estimation, me, sr

MSC: <http://www.k12.wa.us/assessment/WASL/Mathematics/MathematicsModules.aspx> -- Week 1 Assessment Q #16

17. A scientist tested a new anti-fungal spray for roses. An infected rose bush was sprayed each day and the number of uninfected blossoms was recorded. The scatter plot shows the results.

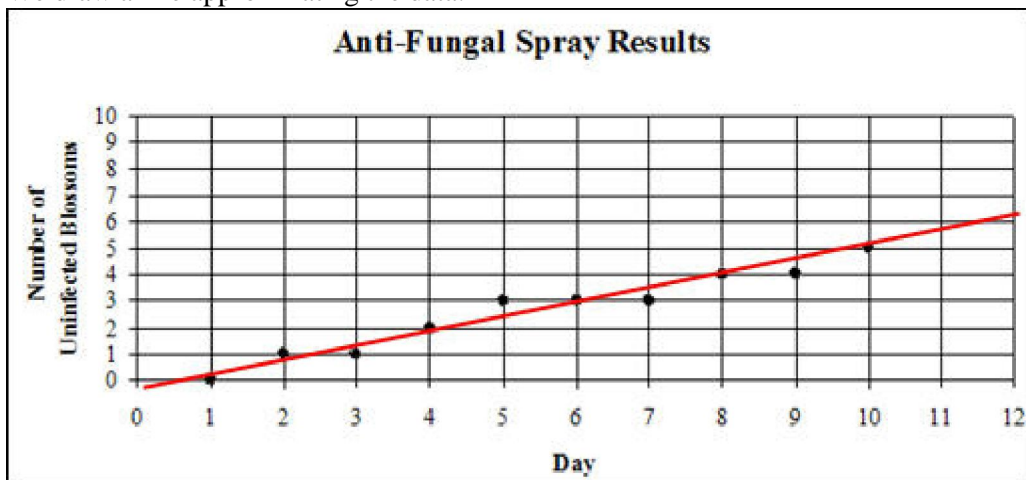


How many uninfected blossoms would the scientist expect to find on day 12?

- a. 4
- b. 6
- c. 8
- d. 10

ANS: B

We draw a line approximating the data.

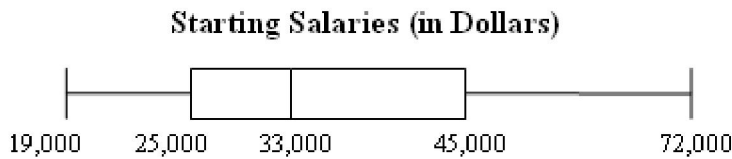


On day 12 (at right) the line is closest to the value 6.

PTS: 1 DIF: Grade 10 REF: PS 03

KEY: scatter plot, approximation, ps, ap

MSC: <http://www.k12.wa.us/assessment/WASL/Mathematics/MathematicsModules.aspx> -- Week 1 Assessment Q #17



18. The box-and-whisker plot above shows the starting salaries for graduates of a small college.

What is the range of the starting salaries?

- | | |
|-------------|-------------|
| a. \$20,000 | c. \$53,000 |
| b. \$33,000 | d. \$72,000 |

ANS: C

The data ranges from: 19,000 to 72,000 (the ends of the whiskers).

The *range* = $72000 - 19000 = 53000$.

The answer is \$53,000

PTS: 1 DIF: Grade 10 REF: PS 02

KEY: box-and-whisker plot, plot, range, money, statistics, ps

MSC: <http://www.k12.wa.us/assessment/WASL/Mathematics/MathematicsModules.aspx> -- Week 1 Assessment Q #18

19. Using the box and whisker plot above to determine the median salary.

- | | |
|-------------|-------------|
| a. \$25,000 | c. \$38,800 |
| b. \$33,000 | d. \$45,000 |

ANS: B

The median of data displayed in a box-and-whisker plot is marked with a line in the box.

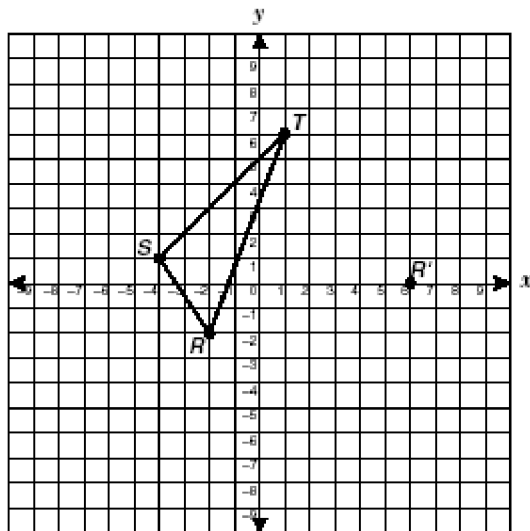
The answer is \$33,000.

PTS: 1 DIF: Grade 10 REF: PS 02

KEY: box-and-whisker plot, plot, median, money, statistics, ps

MSC: <http://www.k12.wa.us/assessment/WASL/Mathematics/MathematicsModules.aspx> -- Week 1 Assessment Q #19

20. Triangle RST is translated so that R is mapped to R' .



- What is the set of ordered pairs best identifies the location of points S' and T' ?
- a. $S'(8, 3), T'(3, 8)$
 - b. $S'(4, 3), T'(9, 8)$
 - c. $S'(10, -1), T'(12, -9)$
 - d. $S'(10, 3), T'(5, 4)$

ANS: B

We need to find the translation from R to R' .

Use counting to get (8,2) *or*

$R(-2, -2)$ and $R'(6, 0)$

So the translation $(x_T, y_T) = (x_{R'} - x_R, y_{R'} - y_R) = (6 - (-2), 0 - (-2)) = (8, 2)$.

$S(-4, 1)$ so $S'(-4 + 8, 1 + 2) = S'(4, 3)$ (and directly choose (b)...)

$T(1, 6)$ so $T'(1 + 8, 6 + 2) = T'(9, 8)$

PTS: 1 DIF: Grade 10 REF: GS 02

KEY: tcoordinate graph, coordinates, translation, gs, me

MSC: <http://www.k12.wa.us/assessment/WASL/Mathematics/MathematicsModules.aspx> -- Week 1 Assessment Q #20 Edited slightly to be bimodal.

21. An automobile dealer is analyzing a frequency table identifying the number of vehicles of each color sold during the last 6 months.

Which measure of data describes the most popular color of vehicle?

- a. Mean
- b. Median
- c. Mode
- d. Range

ANS: C

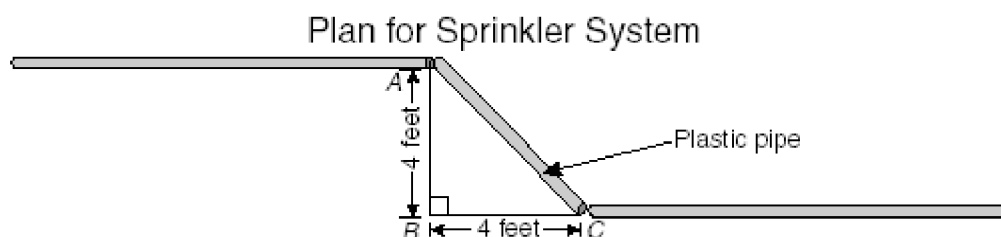
The **mode** tells us which piece of data occurs with the most frequency. So do the words “most popular”. So the answer is “mode”.

PTS: 1 DIF: Grade 10 REF: PS 02

KEY: data measures, mean, median, range, mode, frequency table, ps

MSC: <http://www.k12.wa.us/assessment/WASL/Mathematics/MathematicsModules.aspx> -- Week 1 Assessment Q #21

22. The drawing shows part of the plan for a new underground lawn-sprinkler system.



What is the length of the plastic pipe?

- a. 4.7 ft
- b. 5.7 ft
- c. 6.7 ft
- d. 7.7 ft

ANS: B

The angle at point B is a right angle. So the triangle ABC is a right triangle.

1st way: We use Pythagoras' theorem to find the hypotenuse.

$$d = \sqrt{4^2 + 4^2} = \sqrt{32} = \sqrt{2 \cdot 16} = 4\sqrt{2} \approx 4 \cdot 1.414 = 5.656$$

The answer is 5,7 feet.

or

2nd way: Note that this is a $1 - 1 - \sqrt{2}$ triangle with scale 4. So the hypotenuse is

$$d = 4\sqrt{2} \approx 4 \cdot 1.414 = 5.656$$

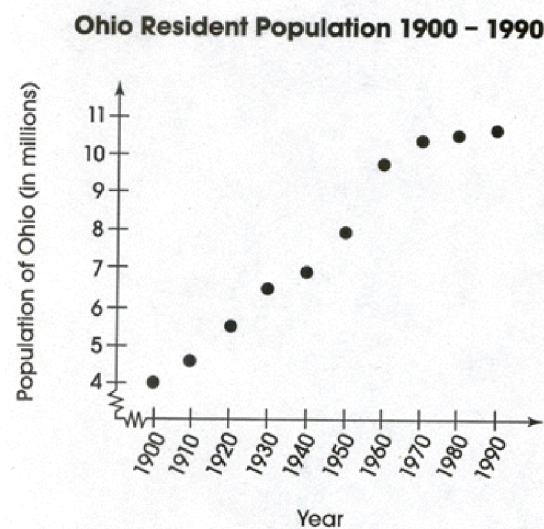
The answer is 5,7 feet.

PTS: 1 DIF: Grade 10 REF: ME 03

KEY: right triangles, basic triangles, pythagoras, pythagoras' theorem, as, me

MSC: <http://www.k12.wa.us/assessment/WASL/Mathematics/MathematicsModules.aspx> -- Week 1 Assessment Q #22

23. The graph shows the population of Ohio from 1900 to 1990.



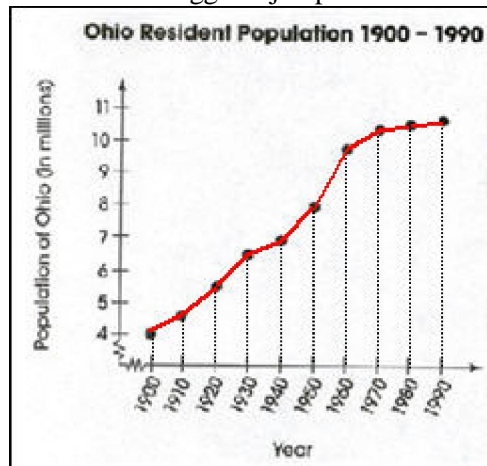
In which decade did the population of Ohio increase the most?

- a. 1910 to 1920
- b. 1940 to 1950
- c. 1950 to 1960
- d. 1960 to 1970

ANS: C

First, notice that this is a line graph minus the lines.

We are asked to find the biggest “jump” so we connect the dots to find the steepest line (greatest slope).

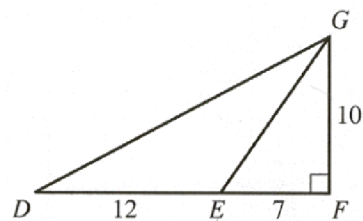


The piece with the steepest slope is from 1950 to 1960.

PTS: 1 DIF: Grade 10 REF: ME 02 KEY: line graph, data, slope
MSC: <http://www.k12.wa.us/assessment/WASL/Mathematics/MathematicsModules.aspx> -- Week 1
Assessment Q #23

24. In the figure below, the lengths of \overline{DE} , \overline{EF} , and \overline{FG} are given, in units.

What is the area, in square units, of $\triangle DFG$?



- | | |
|-------|-------|
| a. 29 | c. 60 |
| b. 51 | d. 95 |

ANS: D

Because $\angle DFG = 90^\circ$, the side $\overline{FG} = h$ (height).

$$\text{So, } A = \frac{1}{2} b \cdot h = \frac{1}{2} (\overline{DE} + \overline{EF}) \cdot \overline{FG} = \frac{1}{2} (12 + 7) \cdot 10 = 19 \cdot 5 = 95.$$

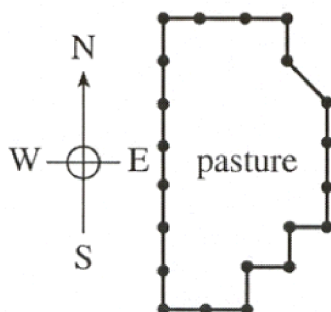
Okay - technically, we should write e.g. $|\overline{DE}|$ to indicate the length, but the above is easier to understand and unmistakable.

PTS: 1 DIF: Grade 10 REF: SR 01

KEY: triangle, right-triangle, length, area, height, units, square units, ge, me, sr

MSC: <http://www.k12.wa.us/assessment/WASL/Mathematics/MathematicsModules.aspx> -- Week 1 Assessment Q #24

25. The diagram below shows a pasture which is fenced in. All but 1 section of fence run straight north-south or east-west. Consecutive fence posts are 10 feet apart except for the 1 diagonal section. Which of the following statements best describes P , the perimeter of the pasture, in feet?



- | | |
|--------------|--------------|
| a. $P > 210$ | c. $P < 210$ |
| b. $P = 210$ | d. $P > 230$ |

ANS: A

There are 20 pieces or 200 feet of 10 foot fence pieces.

The diagonal piece d of fencing must be longer than 10 feet since it is the hypotenuse of a right-triangle with 10 foot sides.

So $P = 200 + d > 200 + 10 = 210$

$P > 210$

PTS: 1 DIF: Grade 10 REF: NS 05

KEY: counting, perimeter, directions, triangular inequality, hypotenuse, triangles, right triangles, ns

MSC: <http://www.k12.wa.us/assessment/WASL/Mathematics/MathematicsModules.aspx> -- Week 1 Assessment Q #25